
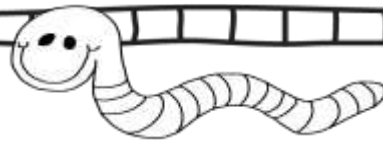
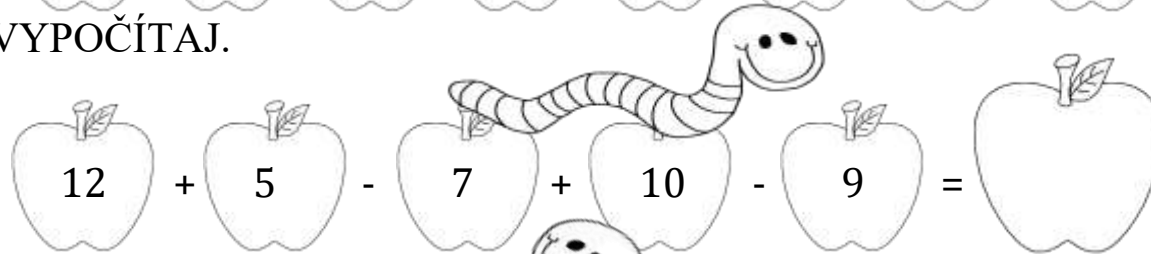


DOPLŇ ČÍSELNÝ RAD.



MENO .....

VYPOČÍTAJ.




DOPLŇ ČÍSLA DO PŘÍKLADOV.

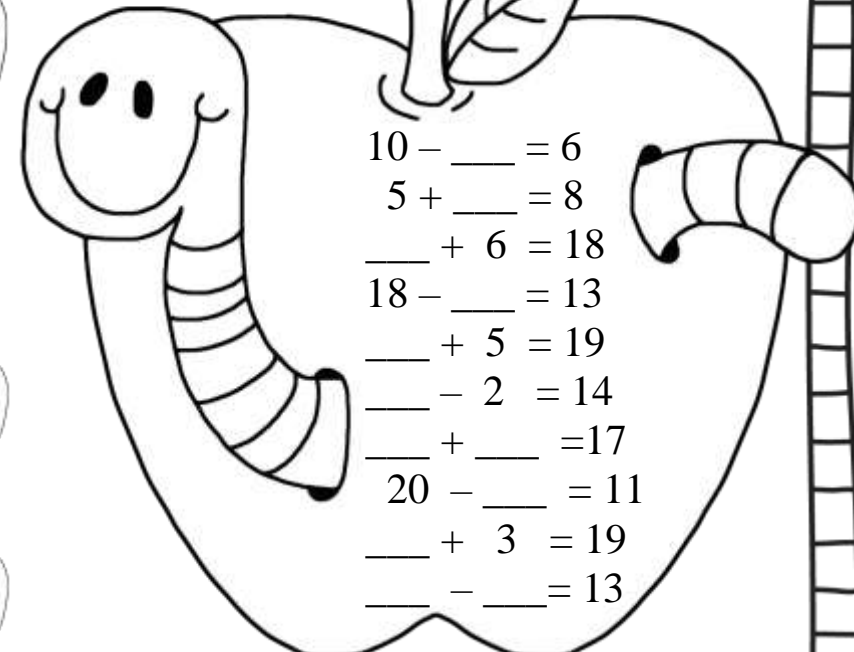
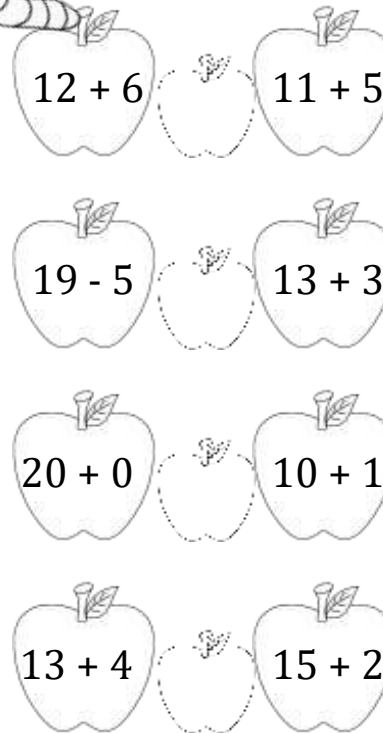
- 10 - \_\_\_ = 6
- 5 + \_\_\_ = 8
- \_\_\_ + 6 = 18
- 18 - \_\_\_ = 13
- \_\_\_ + 5 = 19
- \_\_\_ - 2 = 14
- \_\_\_ + \_\_\_ = 17
- 20 - \_\_\_ = 11
- \_\_\_ + 3 = 19
- \_\_\_ - \_\_\_ = 13

VYPOČÍTAJ.

POROVNAJ.



- |              |              |
|--------------|--------------|
| 8 - 3 = ___  | 11 + 6 = ___ |
| 9 - 4 = ___  | 12 + 2 = ___ |
| 10 - 3 = ___ | 12 + 7 = ___ |
| 16 - 2 = ___ | 20 + 0 = ___ |
| 18 - 5 = ___ | 13 + 4 = ___ |
| 17 - 3 = ___ | 15 + 1 = ___ |
| 12 - 2 = ___ | 16 + 3 = ___ |
| 15 - 3 = ___ | 10 + 7 = ___ |
| 18 - 7 = ___ | 13 + 2 = ___ |
| 20 - 6 = ___ | 12 + 5 = ___ |
| 19 - 8 = ___ | 15 + 5 = ___ |



9 - ŽLTÁ    15 - ZELENÁ    18 - ČERVENÁ

