

# Matematika

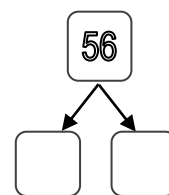
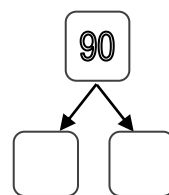
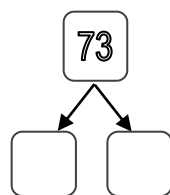
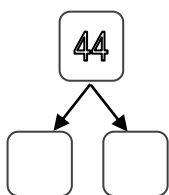
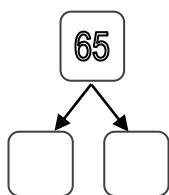
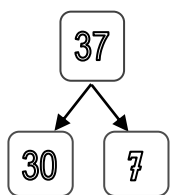
Meno a priezvisko: \_\_\_\_\_

## 1. Doplň chýbajúce desiatky.

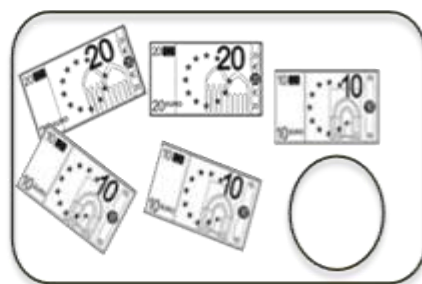
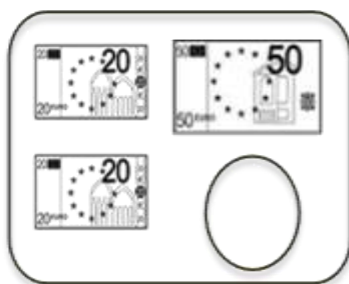
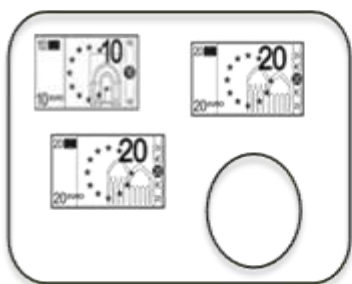
		80		60				20	
--	--	----	--	----	--	--	--	----	--

10				50				90	
----	--	--	--	----	--	--	--	----	--

## 2. Rozlož čísla na desiatky a jednotky. Pracuj podľa vzoru.



## 3. Koľko € mám v peňaženke? Výsledok zapíš do kruhu.



## 4. Porovnaj.

80 □ 50

43 □ 73

60 □ 66

79 □ 90

40 □ 100

56 □ 6

5. Pomôž snehuliakovi vypočítať príklady.

$14 + 4 =$	$15 - 6 =$	$\square + 2 = 8$
$18 - 9 =$	$17 + 2 =$	$15 - \square = 10$
$10 + 10 =$	$20 - 10 =$	$\square - 4 = 16$
$17 - 5 =$	$13 + 4 =$	$13 + \square = 10$

6. Vyrieš slovnú úlohu:

Samko vymeškal v škole 30 hodín.

Janka 20 hodín .

Koľko hodín vymeškali spolu?



Výpočet: \_\_\_\_\_ Odpoveď: \_\_\_\_\_

7. Porovnaj.

$60 \bigcirc 69$	$76 \bigcirc 78$
$67 \bigcirc 63$	$72 \bigcirc 74$
$62 \bigcirc 68$	$75 \bigcirc 71$
$65 \bigcirc 65$	$82 \bigcirc 83$
$65 \bigcirc 61$	$89 \bigcirc 89$
$79 \bigcirc 77$	$87 \bigcirc 86$

Doplň chýbajúce čísla (hneď pred a hneď za daným číslom).

	25	
--	----	--

	83	
--	----	--

	76	
--	----	--

	45	
--	----	--

	15	
--	----	--



	30	
--	----	--

	44	
--	----	--

	24	
--	----	--


	29	
--	----	--

	81	
--	----	--

	65	
--	----	--

	49	
--	----	--

	38	
--	----	--



	97	
--	----	--

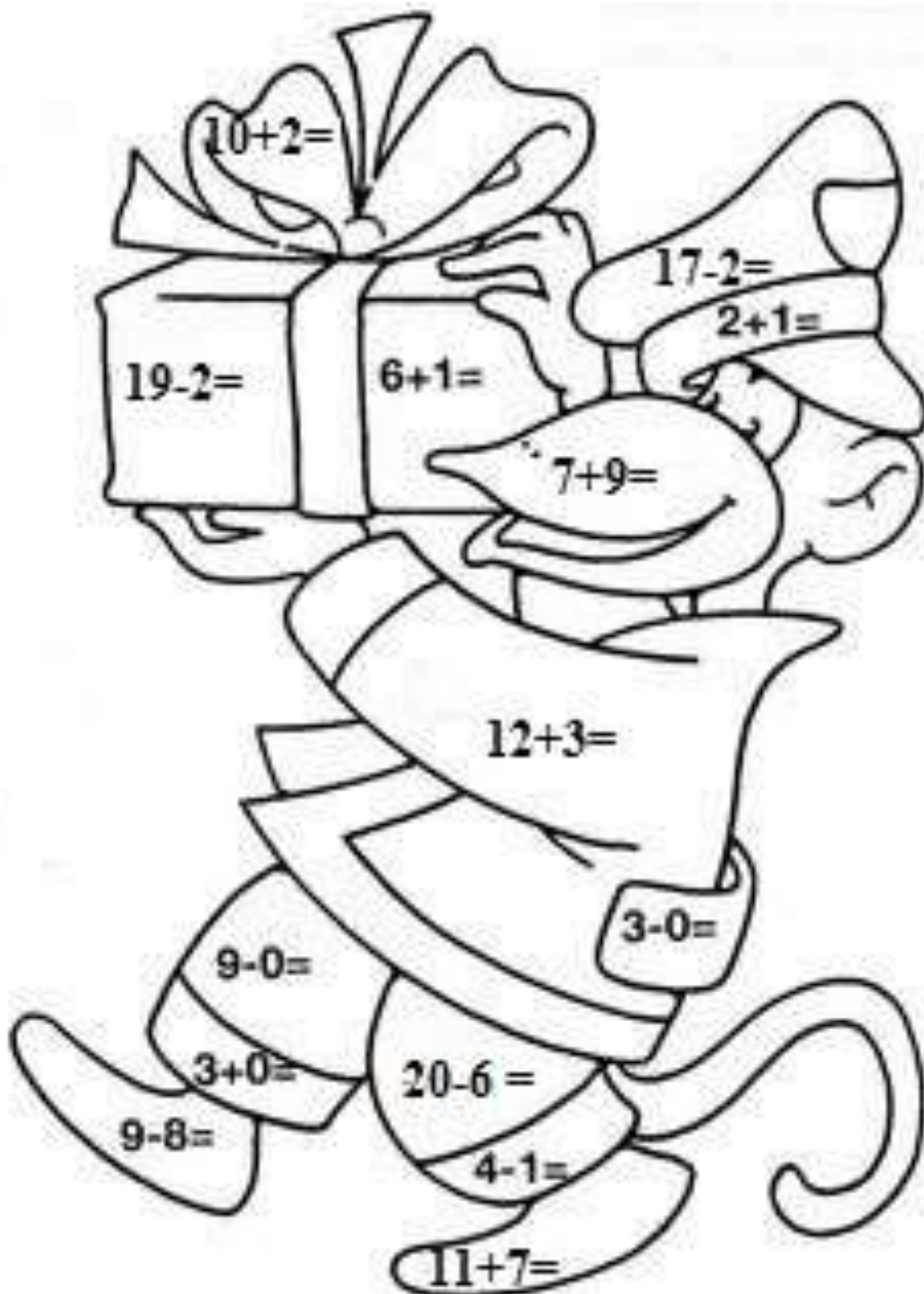
	71	
--	----	--

	60	
--	----	--










	99	
--	----	--










	88	
--	----	--


Vypočítaj.





















Doplň chýbajúce číslo..

1	2	3	4	5	6	7	8	9	10
11	12	13	14	15	16	17	18		20
21	22		24	25		27	28	29	30
31	32	33	34	35	36	37	38	39	40
41	42	43	44		46	47	48	49	50
51	52	53	54	55	56	57	58		60
61	62	63	64	65		67	68	69	70
71		73	74	75	76	77	78	79	80
81	82	83	84	85	86	87	88	89	90
	92	93	94	95	96	97	98		100

 \_\_\_\_\_  
 \_\_\_\_\_  
 \_\_\_\_\_  
 \_\_\_\_\_  
 \_\_\_\_\_  
 \_\_\_\_\_  
 \_\_\_\_\_  
 \_\_\_\_\_  
 \_\_\_\_\_



1	2		4	5	6	7	8	9	10
11	12	13	14	15	16	17	18	19	20
21	22	23	24	25	26	27		29	30
31		33	34		36	37	38	39	40
41	42	43	44	45	46		48	49	50
51	52	53	54	55	56	57	58	59	60
61	62		64	65	66	67	68	69	
71		73	74	75	76	77	78	79	80
81	82	83	84	85	86		88	89	90
91	92	93	94	95	96	97	98	99	100

 \_\_\_\_\_  
 \_\_\_\_\_  
 \_\_\_\_\_  
 \_\_\_\_\_  
 \_\_\_\_\_  
 \_\_\_\_\_  
 \_\_\_\_\_  
 \_\_\_\_\_  
 \_\_\_\_\_

